

Square and Cube Numbers

Maths Mastery

Ring the square numbers.

1	49	4	17	36	89	144
75	101	81	123	46	9	
100	25	66	16	121	12	64

Ring the cube numbers.

1	12	343	8	1000	125	
89	64	50	81	27	1200	9
729	42	216	100	512		

Match the squared and cube numbers.

2²

6²

3²

7²

11²

9²

12²

1²

4²

5²

8²

49

25

121

216

144

16

64

125

1

81

9

27

36

8

4

1³

4³

6³

3³

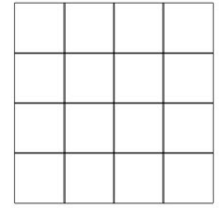
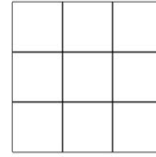
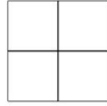
2³

5³

Square and Cube Numbers



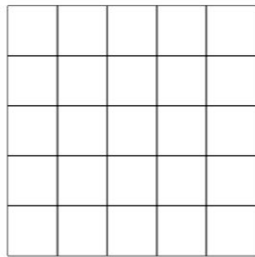
Maths Mastery

Write the number that is squared and the square number for each of these diagrams.





Number Squared: _____

Square Number: _____



Number Squared: _____

Square Number: _____




Number Squared: _____

Square Number: _____

Square and Cube Numbers


Maths Mastery

Write the number that is squared and the square number for each of these diagrams.




Number Squared: _____

Square Number: _____



Number Squared: _____

Square Number: _____



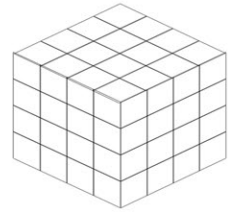


Number Squared: _____

Square Number: _____

Square and Cube Numbers

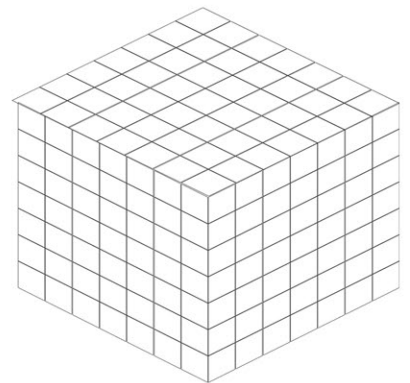
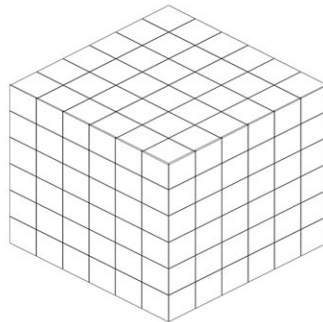
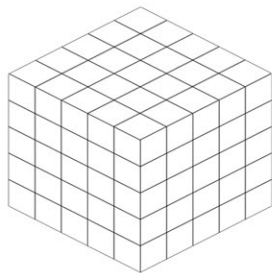
Maths Mastery

Write the number that is cubed and the cube number for each of these diagrams.



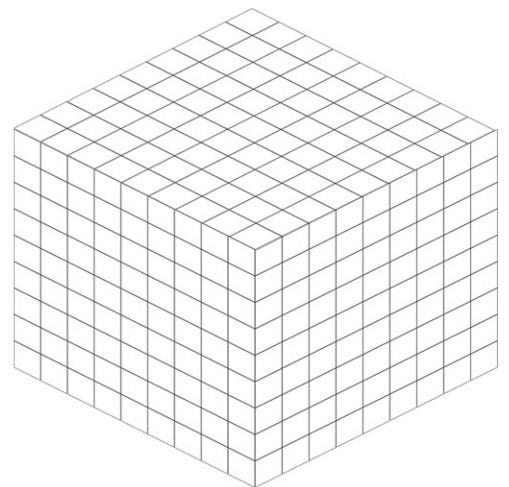
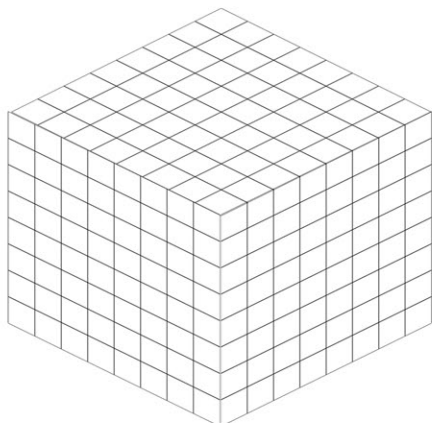
Number Cubed:

Cube Number:



Number Cubed:

Cube Number:



Number Cubed:

Cube Number:
